

Name.....






Class:.....

Date:.....

Picture Graphical Interpretation

Help our Sincere  Snake to answer the following question.

The table shows the candies collected by the children during Halloween Trick or Treat. Look at the picture table and fill in the blanks.

Children	Candies collected by them
Sam	
Jack	
John	
Kane	
Mark	

- collected more candies.
- Jack and Mark together collected candies.
- Kane collected candies more than Sam.
- John collected..... candies less than Mark.
- collected least candies.
- Altogether how many candies were collected by the children?
.....

Thank you for helping me.  Happy Learning