

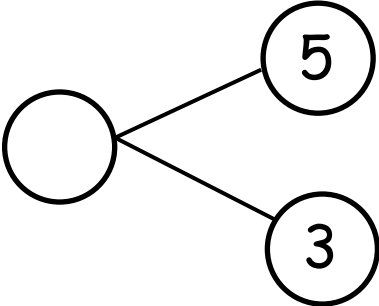
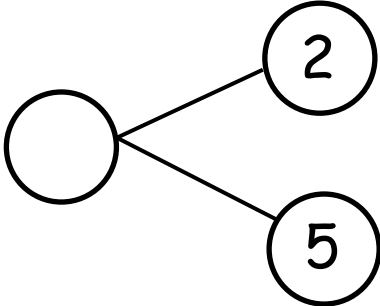
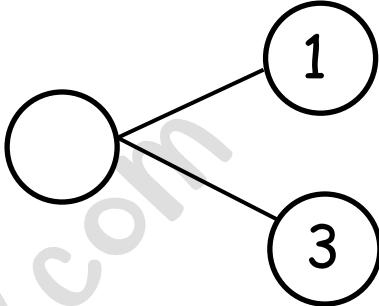
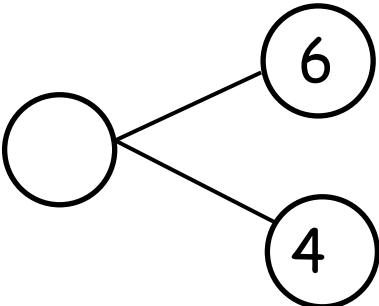
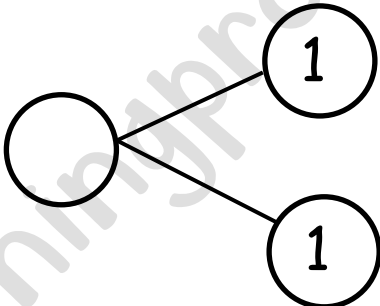
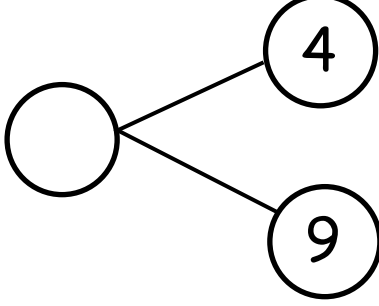
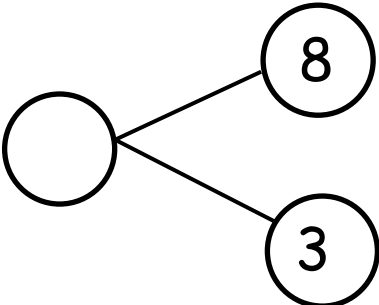
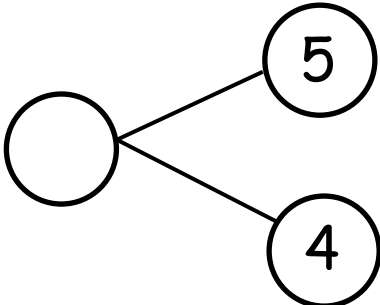
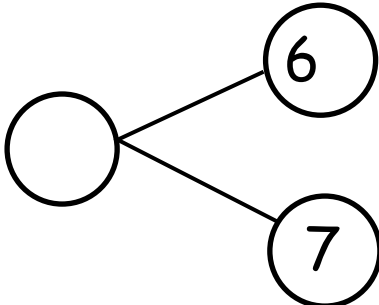
Name.....

Class.....

Date.....

Solve the Number Bonding with our Friend Outstanding  Octopus

Direction: Fill in the missing numbers that makes the number bond complete

$5 + 3 = \dots\dots$ 	$2 + 5 = \dots\dots$ 	$1 + 3 = \dots\dots$ 
$6 + 4 = \dots\dots$ 	$1 + 1 = \dots\dots$ 	$4 + 9 = \dots\dots$ 
$8 + 3 = \dots\dots$ 	$5 + 4 = \dots\dots$ 	$6 + 7 = \dots\dots$ 

Thank you for joining me.  Happy Learning